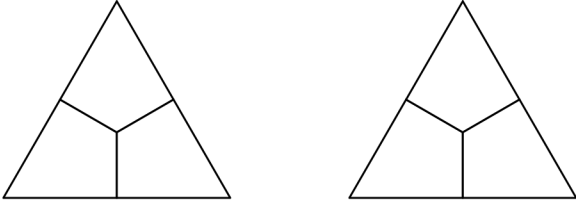
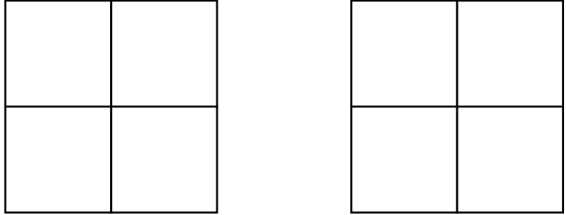
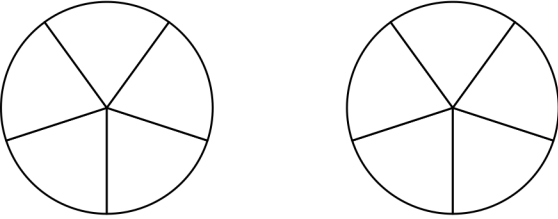
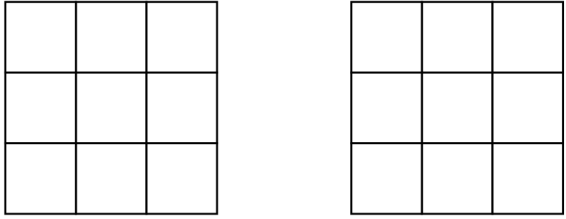
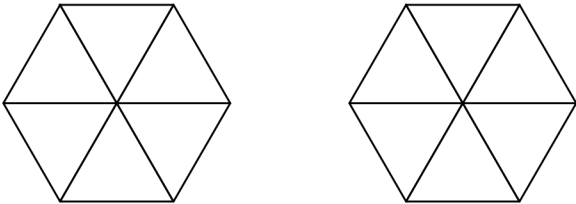
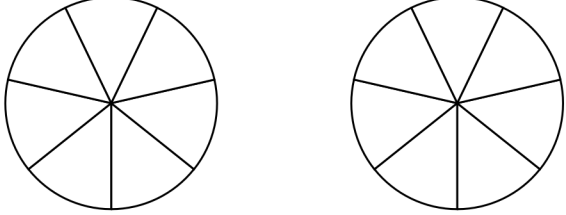
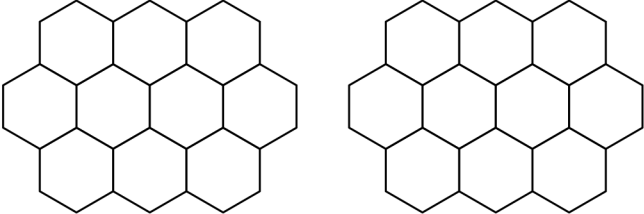
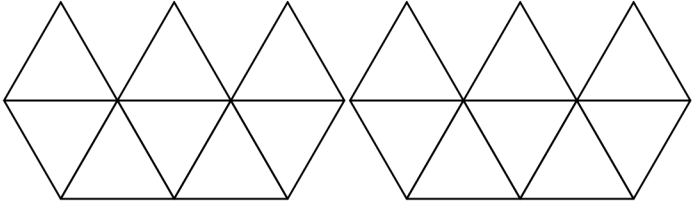
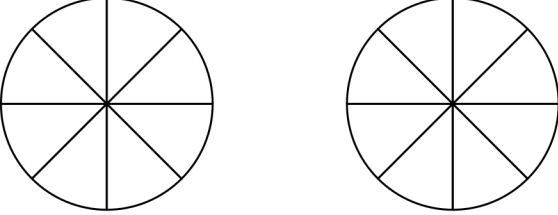
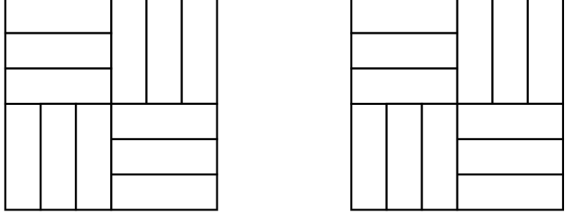


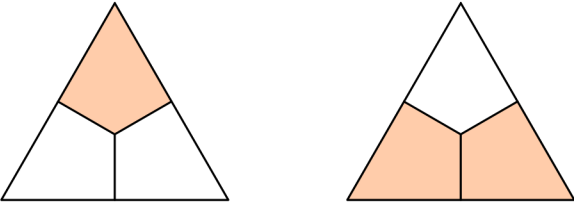
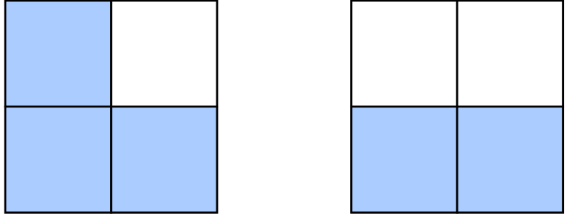
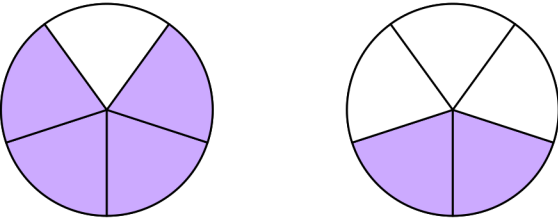
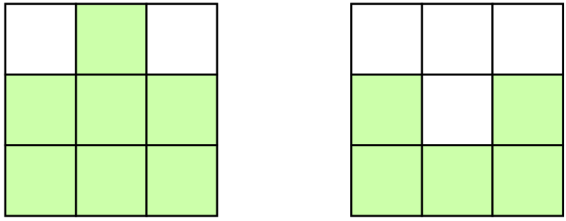
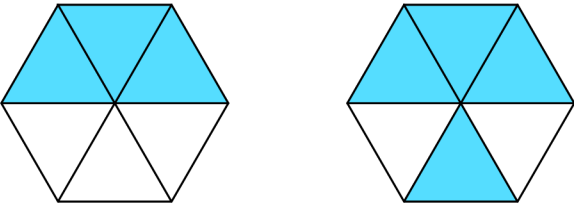
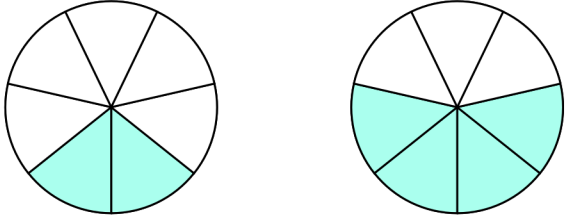
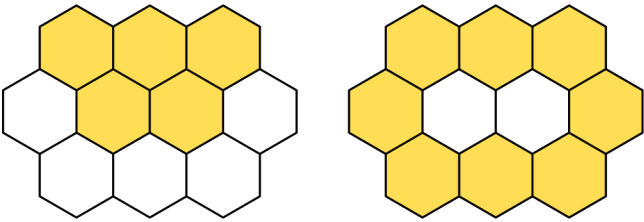
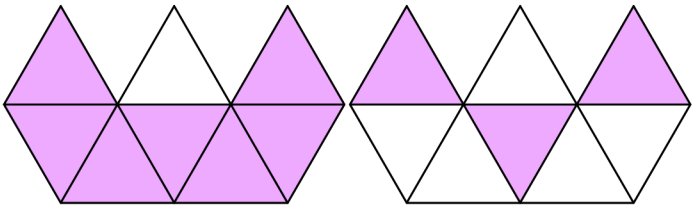
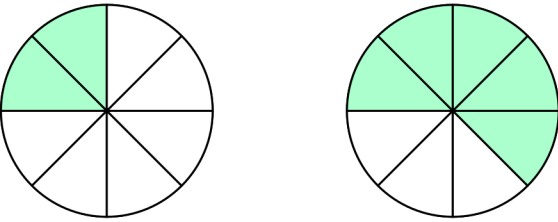
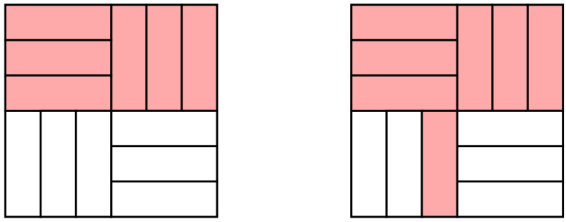
Porównywanie ułamków [3]

Pokoloruj wskazane części figur, aby pokazać ułamki. Porównaj ułamki wstawiając znak $>$, $<$ lub $=$.

 <p>$\frac{1}{3}$ <input type="checkbox"/> $\frac{2}{3}$</p>	 <p>$\frac{3}{4}$ <input type="checkbox"/> $\frac{2}{4}$</p>
 <p>$\frac{4}{5}$ <input type="checkbox"/> $\frac{2}{5}$</p>	 <p>$\frac{7}{9}$ <input type="checkbox"/> $\frac{5}{9}$</p>
 <p>$\frac{3}{6}$ <input type="checkbox"/> $\frac{4}{6}$</p>	 <p>$\frac{2}{7}$ <input type="checkbox"/> $\frac{4}{7}$</p>
 <p>$\frac{5}{10}$ <input type="checkbox"/> $\frac{8}{10}$</p>	 <p>$\frac{7}{8}$ <input type="checkbox"/> $\frac{3}{8}$</p>
 <p>$\frac{2}{8}$ <input type="checkbox"/> $\frac{5}{8}$</p>	 <p>$\frac{6}{12}$ <input type="checkbox"/> $\frac{7}{12}$</p>

Porównywanie ułamków [3]

Pokoloruj wskazane części figur, aby pokazać ułamki. Porównaj ułamki wstawiając znak $>$, $<$ lub $=$.

 <p>$\frac{1}{3}$ $<$ $\frac{2}{3}$</p>	 <p>$\frac{3}{4}$ $>$ $\frac{2}{4}$</p>
 <p>$\frac{4}{5}$ $>$ $\frac{2}{5}$</p>	 <p>$\frac{7}{9}$ $>$ $\frac{5}{9}$</p>
 <p>$\frac{3}{6}$ $<$ $\frac{4}{6}$</p>	 <p>$\frac{2}{7}$ $<$ $\frac{4}{7}$</p>
 <p>$\frac{5}{10}$ $<$ $\frac{8}{10}$</p>	 <p>$\frac{7}{8}$ $>$ $\frac{3}{8}$</p>
 <p>$\frac{2}{8}$ $<$ $\frac{5}{8}$</p>	 <p>$\frac{6}{12}$ $<$ $\frac{7}{12}$</p>