

Dodawanie w zakresie 0 - 10.

1. Uzupełnij działania według podanego schematu.

$3 + \square = 5$



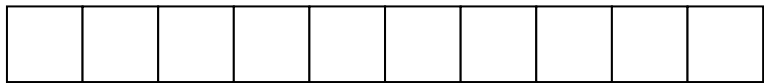
$2 + \square = 6$




$5 + \square = 8$



$6 + \square = 7$



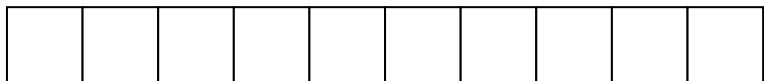
$1 + \square = 4$



$4 + \square = 10$



$9 + \square = 9$

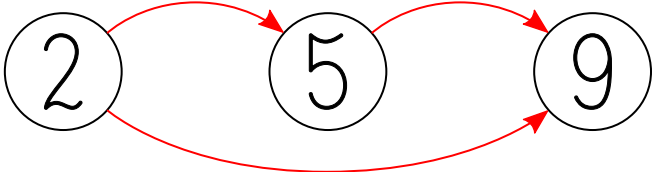


2. Uzupełnij grafy.



$+$

$+$



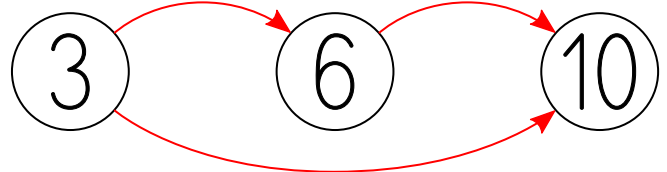
$+$

$2 + \square + \square = 9 = 2 + \square$



$+$

$+$



$+$

