

Dodawanie w zakresie 0 - 10.

1. Uzupełnij działania według podanego schematu.


$2+3=5$




$6+1=$




$4+3=$




$5+4=$




$1+7=$




$2+8=$



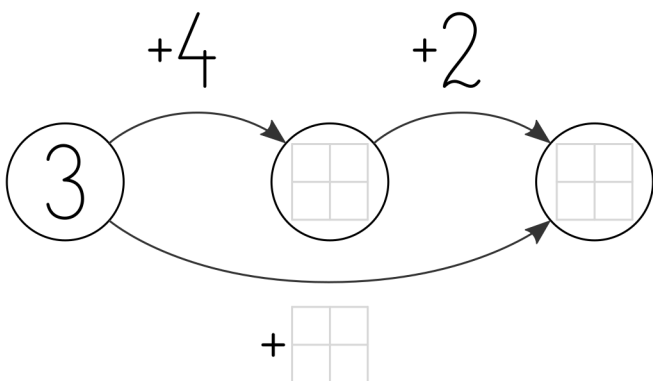

$3+5=$



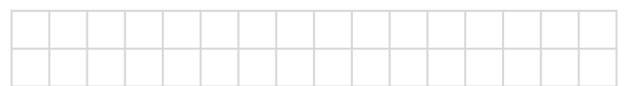
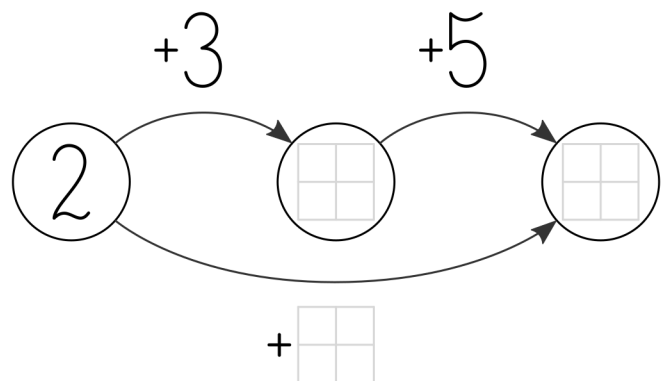
$8+0=$



2. Uzupełnij grafy.



$3+4+2=$ $=3+$




Dodawanie w zakresie 0 - 10.

1. Uzupełnij działania według podanego schematu.


$2 + 3 = 5$



$6 + 1 = 7$



$4 + 3 = 7$



$5 + 4 = 9$



$1 + 7 = 8$




$2 + 8 = 10$



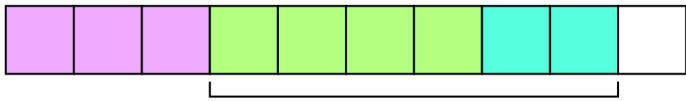
$3 + 5 = 8$



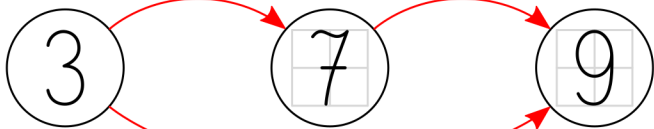
$8 + 0 = 8$



2. Uzupełnij grafy.



$+4 \quad +2$



$+6$

$3 + 4 + 2 = 9 = 3 + 6$



$+3 \quad +5$



$+8$

$2 + 3 + 5 = 10 = 2 + 8$