

# Dodawanie w zakresie 0 - 20

1. Uzupełnij działania według podanego schematu.

$$5 + 2 + 5 =$$

$$10 + 2 = 12$$

$$4 + 6 + 5 =$$

$$10 + =$$

$$7 + 1 + 3 =$$

$$3 + 8 + 2 =$$

$$1 + 8 + 9 =$$

$$0 + 10 + 7 =$$

--	--	--	--	--

--	--	--	--	--

--	--	--	--	--

--	--	--	--	--

--	--	--	--	--

--	--	--	--	--

--	--	--	--	--

--	--	--	--	--

--	--	--	--	--

--	--	--	--	--

--	--	--	--	--

--	--	--	--	--

--	--	--	--	--

--	--	--	--	--

--	--	--	--	--

--	--	--	--	--

--	--	--	--	--

--	--	--	--	--

--	--	--	--	--

--	--	--	--	--

--	--	--	--	--

--	--	--	--	--

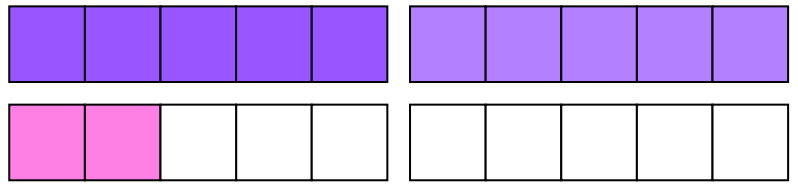
--	--	--	--	--

--	--	--	--	--


# Dodawanie w zakresie 0 - 20

1. Uzupełnij działania według podanego schematu.

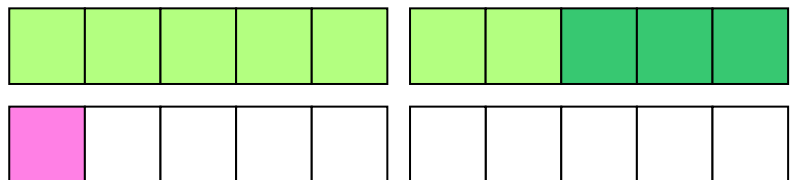
$$\begin{array}{c} \textcircled{5} + 2 + \textcircled{5} = \\ \textcircled{10} + 2 = 12 \end{array}$$



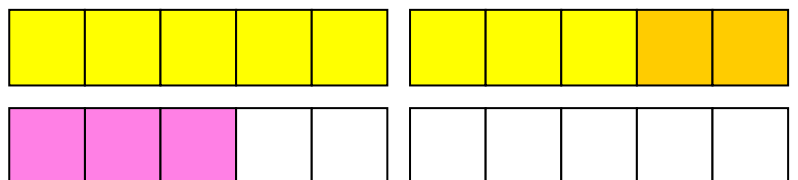
$$\begin{array}{c} \textcircled{4} + \textcircled{6} + 5 = \\ \textcircled{10} + 5 = 15 \end{array}$$




$$\begin{array}{c} \textcircled{7} + 1 + \textcircled{3} = \\ \textcircled{10} + 1 = 11 \end{array}$$



$$\begin{array}{c} 3 + \textcircled{8} + \textcircled{2} = \\ \textcircled{10} + 3 = 13 \end{array}$$



$$\begin{array}{c} \textcircled{1} + 8 + \textcircled{9} = \\ \textcircled{10} + 8 = 18 \end{array}$$



$$\begin{array}{c} \textcircled{0} + \textcircled{10} + 7 = \\ \textcircled{10} + 7 = 17 \end{array}$$

