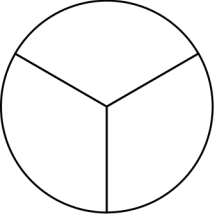
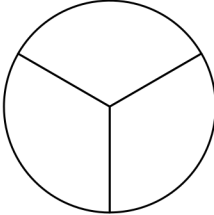
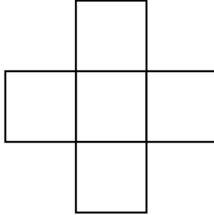
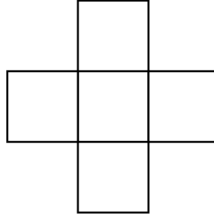
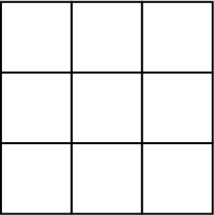
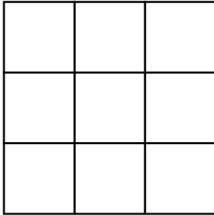
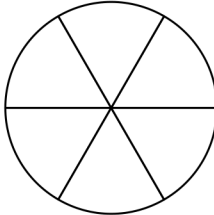
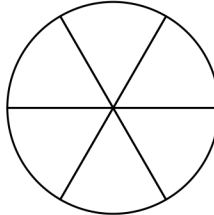
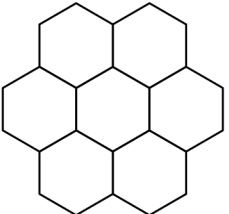
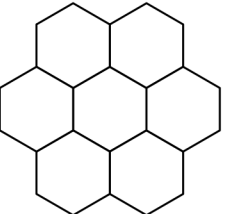
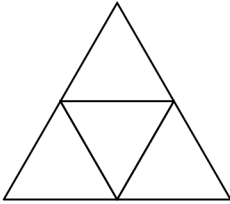
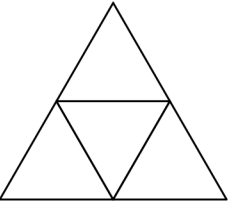
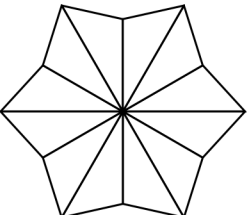
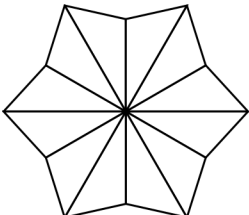
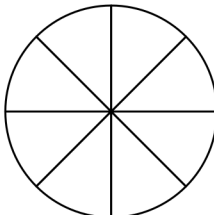
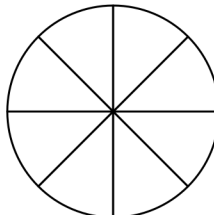
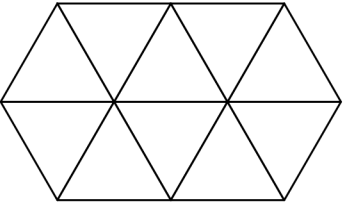
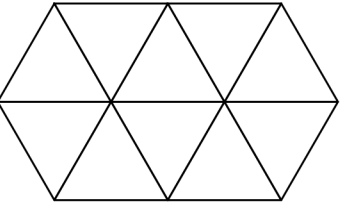
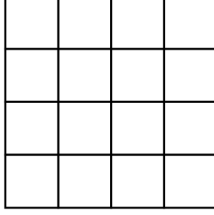
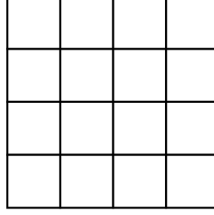


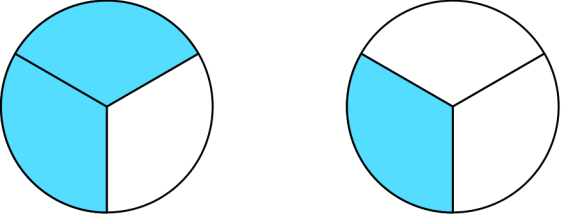
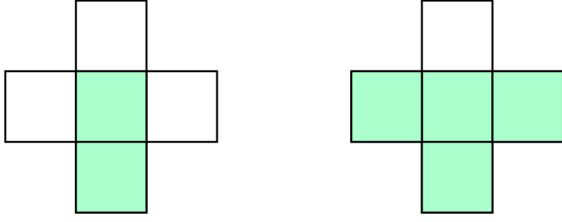
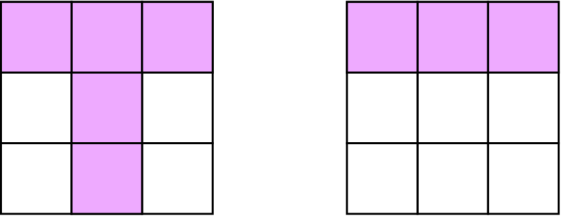
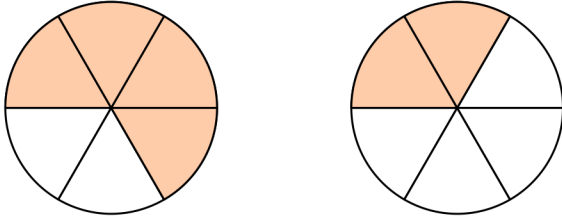
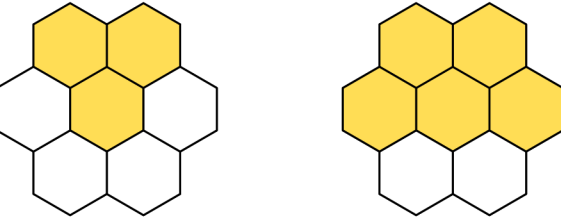
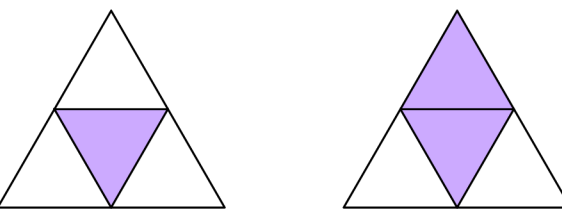
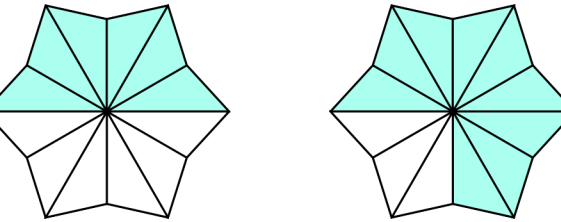
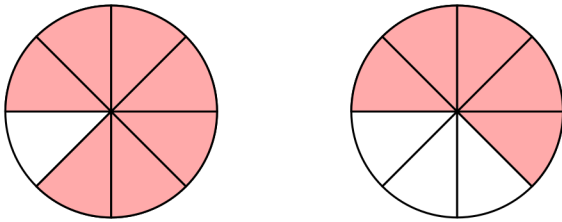
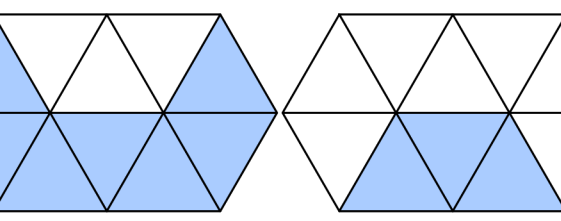
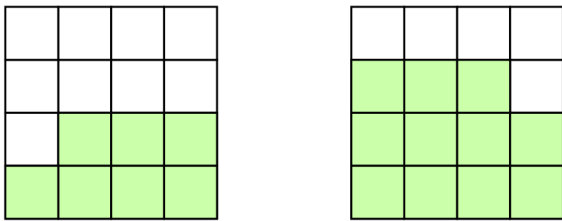
Porównywanie ułamków [1]

Pokoloruj wskazane części figur, aby pokazać ułamki. Porównaj ułamki wstawiając znak $>$, $<$ lub $=$.

 $\frac{2}{3}$ <input type="checkbox"/>	 $\frac{1}{3}$ <input type="checkbox"/>	 $\frac{2}{5}$ <input type="checkbox"/>	 $\frac{4}{5}$ <input type="checkbox"/>
 $\frac{5}{9}$ <input type="checkbox"/>	 $\frac{3}{9}$ <input type="checkbox"/>	 $\frac{4}{6}$ <input type="checkbox"/>	 $\frac{2}{6}$ <input type="checkbox"/>
 $\frac{3}{7}$ <input type="checkbox"/>	 $\frac{5}{7}$ <input type="checkbox"/>	 $\frac{1}{4}$ <input type="checkbox"/>	 $\frac{2}{4}$ <input type="checkbox"/>
 $\frac{6}{12}$ <input type="checkbox"/>	 $\frac{9}{12}$ <input type="checkbox"/>	 $\frac{7}{8}$ <input type="checkbox"/>	 $\frac{5}{8}$ <input type="checkbox"/>
 $\frac{7}{10}$ <input type="checkbox"/>	 $\frac{3}{10}$ <input type="checkbox"/>	 $\frac{7}{16}$ <input type="checkbox"/>	 $\frac{11}{16}$ <input type="checkbox"/>

Porównywanie ułamków [1]

Pokoloruj wskazane części figur, aby pokazać ułamki. Porównaj ułamki wstawiając znak $>$, $<$ lub $=$.

 <p>$\frac{2}{3}$ $>$ $\frac{1}{3}$</p>	 <p>$\frac{2}{5}$ $<$ $\frac{4}{5}$</p>
 <p>$\frac{5}{9}$ $>$ $\frac{3}{9}$</p>	 <p>$\frac{4}{6}$ $>$ $\frac{2}{6}$</p>
 <p>$\frac{3}{7}$ $<$ $\frac{5}{7}$</p>	 <p>$\frac{1}{4}$ $<$ $\frac{2}{4}$</p>
 <p>$\frac{6}{12}$ $<$ $\frac{9}{12}$</p>	 <p>$\frac{7}{8}$ $>$ $\frac{5}{8}$</p>
 <p>$\frac{7}{10}$ $>$ $\frac{3}{10}$</p>	 <p>$\frac{7}{16}$ $<$ $\frac{11}{16}$</p>