

Odejmowanie w zakresie 0 - 20 z przekroczeniem progu dziesiątkowego

1. Uzupełnij działania według podanego schematu.

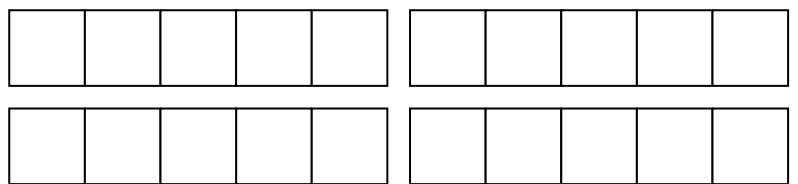


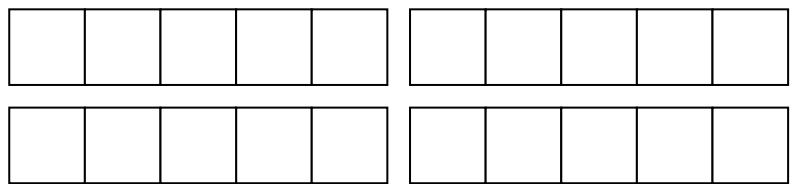
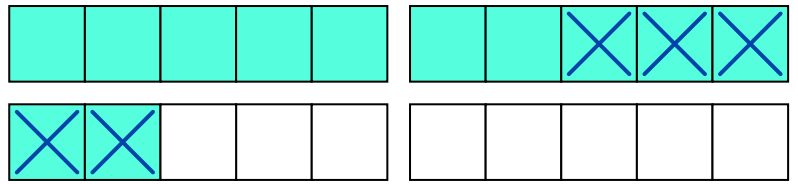
$12 - 5 = (12 - 2) - 3 =$
 $10 - 3 = 7$

$13 - 4 = (13 - \quad) - \quad =$
 $10 - \quad =$

$11 - 5 = (11 - \quad) - \quad =$

$14 - 9 = (14 - \quad) - \quad =$

$16 - 8 = (16 - \quad) - \quad =$

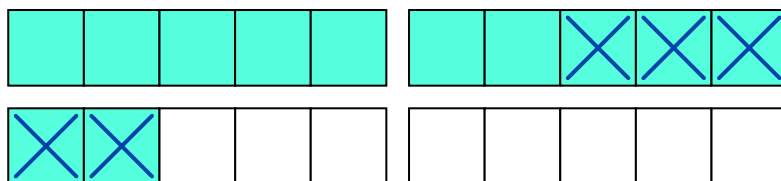


Odejmowanie w zakresie 0 - 20 z przekroczeniem progu dziesiątkowego

1. Uzupełnij działania według podanego schematu.

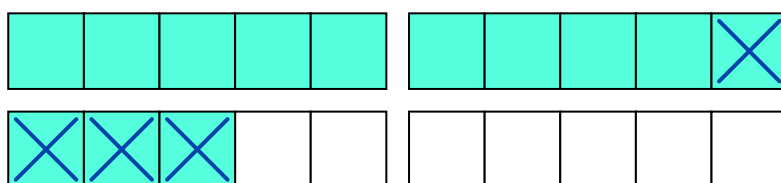
$$12 - 5 = (12 - 2) - 3 =$$

$$10 - 3 = 7$$



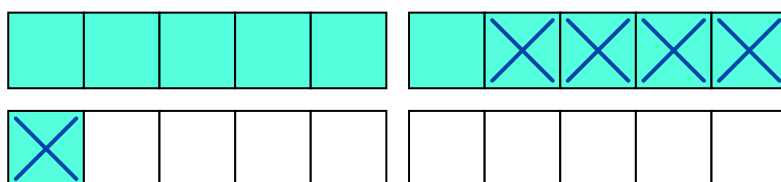
$$13 - 4 = (13 - 3) - 1 =$$

$$10 - 1 = 9$$



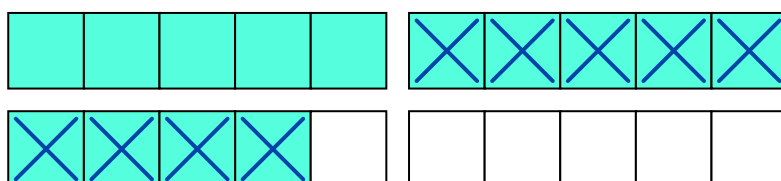
$$11 - 5 = (11 - 1) - 4 =$$

$$10 - 4 = 6$$



$$14 - 9 = (14 - 4) - 5 =$$

$$10 - 5 = 5$$



$$16 - 8 = (16 - 6) - 2 =$$

$$10 - 2 = 8$$

