

Odejmowanie w zakresie 0 - 10.

1. Uzupełnij działania według podanego schematu.


$5 - \square = 1$




$4 - \square = 3$




$6 - \square = 2$




$7 - \square = 4$




$10 - \square = 5$



$8 - \square = 7$



$9 - \square = 9$



2. Uzupełnij grafy.

$8 - \square = 4$ $4 - \square = 2$

$8 \rightarrow 4 \rightarrow 2$

$8 - \square = 2$

$8 - \square - \square = 2 = 8 - \square$

$10 - \square = 4$ $4 - \square = 1$

$10 \rightarrow 4 \rightarrow 1$

$10 - \square = 1$