

Odejmowanie w zakresie 0 - 10.

1. Uzupełnij działania według podanego schematu.


$4 - 2 =$



$3 - 1 =$



$6 - 3 =$



$7 - 3 =$



$10 - 4 =$



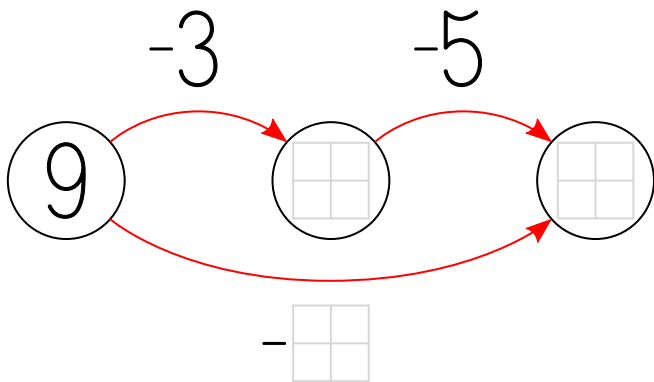

$9 - 8 =$



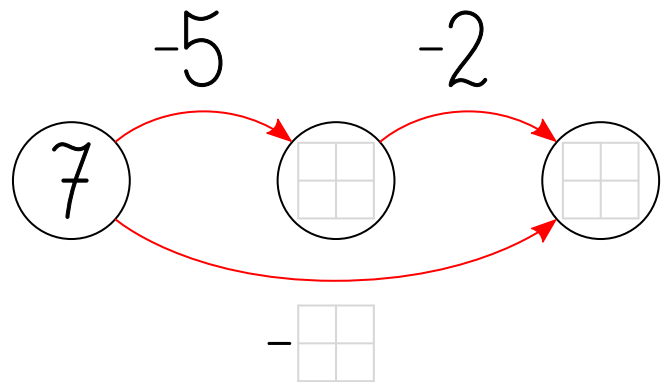

$5 - 0 =$



2. Uzupełnij grafy.



$9 - 3 - 5 = \square = 9 - \square$



$\square - \square - \square = \square$